

**PAPER-III**  
**COMPUTER SCIENCE & APPLICATIONS**

**Signature and Name of Invigilator**

1. (Signature) \_\_\_\_\_

(Name) \_\_\_\_\_

2. (Signature) \_\_\_\_\_

(Name) \_\_\_\_\_

**D 8 7 1 3**

Time : 2 ½ hours]

OMR Sheet No. : .....

(To be filled by the Candidate)

Roll No. 

--	--	--	--	--	--	--	--

(In figures as per admission card)

Roll No. \_\_\_\_\_

(In words)

[Maximum Marks : 150

Number of Pages in this Booklet : 12

Number of Questions in this Booklet : 75

**Instructions for the Candidates**

1. Write your roll number in the space provided on the top of this page.
2. This paper consists of seventy five multiple-choice type of questions.
3. At the commencement of examination, the question booklet will be given to you. In the first 5 minutes, you are requested to open the booklet and compulsorily examine it as below :
  - (i) To have access to the Question Booklet, tear off the paper seal on the edge of this cover page. Do not accept a booklet without sticker-seal and do not accept an open booklet.
  - (ii) **Tally the number of pages and number of questions in the booklet with the information printed on the cover page. Faulty booklets due to pages/questions missing or duplicate or not in serial order or any other discrepancy should be got replaced immediately by a correct booklet from the invigilator within the period of 5 minutes. Afterwards, neither the Question Booklet will be replaced nor any extra time will be given.**
  - (iii) After this verification is over, the OMR Sheet Number should be entered on this Test Booklet.
4. Each item has four alternative responses marked (A), (B), (C) and (D). You have to darken the circle as indicated below on the correct response against each item.  
**Example :** (A) (B) (C) (D)  
where (C) is the correct response.
5. Your responses to the items are to be indicated in the **OMR Sheet given inside the Booklet only**. If you mark at any place other than in the circle in the OMR Sheet, it will not be evaluated.
6. Read instructions given inside carefully.
7. Rough Work is to be done in the end of this booklet.
8. If you write your Name, Roll Number, Phone Number or put any mark on any part of the OMR Sheet, except for the space allotted for the relevant entries, which may disclose your identity, or use abusive language or employ any other unfair means such as change of response by scratching or using white fluid, you will render yourself liable to disqualification.
9. You have to return the test question booklet and Original OMR Sheet to the invigilators at the end of the examination compulsorily and must not carry it with you outside the Examination Hall. You are, however, allowed to carry duplicate copy of OMR Sheet on conclusion of examination.
10. Use only **Blue/Black Ball point pen**.
11. Use of any calculator or log table etc., is prohibited.
12. There is no negative marks for incorrect answers.

**परीक्षार्थियों के लिए निर्देश**

1. इस पृष्ठ के ऊपर नियत स्थान पर अपना रोल नम्बर लिखिए ।
2. इस प्रश्न-पत्र में पचहत्तर बहुविकल्पीय प्रश्न हैं ।
3. परीक्षा प्रारम्भ होने पर, प्रश्न-पुस्तिका आपको दे दी जायेगी । पहले पाँच मिनट आपको प्रश्न-पुस्तिका खोलने तथा उसकी निम्नलिखित जाँच के लिए दिये जायेंगे, जिसकी जाँच आपको अवश्य करनी है :
  - (i) प्रश्न-पुस्तिका खोलने के लिए उसके कवर पेज पर लगी कागज की सील को फाड़ लें । खुली हुई या बिना स्टीकर-सील की पुस्तिका स्वीकार न करें ।
  - (ii) **कवर पृष्ठ पर छपे निर्देशानुसार प्रश्न-पुस्तिका के पृष्ठ तथा प्रश्नों की संख्या को अच्छी तरह चैक कर लें कि ये पूरे हैं । दोषपूर्ण पुस्तिका जिनमें पृष्ठ/प्रश्न कम हों या दुबारा आ गये हों या सीरियल में न हों अर्थात् किसी भी प्रकार की त्रुटिपूर्ण पुस्तिका स्वीकार न करें तथा उसी समय उसे लौटाकर उसके स्थान पर दूसरी सही प्रश्न-पुस्तिका ले लें । इसके लिए आपको पाँच मिनट दिये जायेंगे । उसके बाद न तो आपकी प्रश्न-पुस्तिका वापस ली जायेगी और न ही आपको अतिरिक्त समय दिया जायेगा ।**
  - (iii) इस जाँच के बाद OMR पत्रक की क्रम संख्या इस प्रश्न-पुस्तिका पर अंकित कर दें ।
4. प्रत्येक प्रश्न के लिए चार उत्तर विकल्प (A), (B), (C) तथा (D) दिये गये हैं । आपको सही उत्तर के वृत्त को पेन से भरकर काला करना है जैसा कि नीचे दिखाया गया है ।  
**उदाहरण :** (A) (B) (C) (D)  
जबकि (C) सही उत्तर है ।
5. प्रश्नों के उत्तर केवल प्रश्न पुस्तिका के अन्दर दिये गये OMR पत्रक पर ही अंकित करने हैं । यदि आप OMR पत्रक पर दिये गये वृत्त के अलावा किसी अन्य स्थान पर उत्तर चिह्नित करते हैं, तो उसका मूल्यांकन नहीं होगा ।
6. अन्दर दिये गये निर्देशों को ध्यानपूर्वक पढ़ें ।
7. कच्चा काम (Rough Work) इस पुस्तिका के अन्तिम पृष्ठ पर करें ।
8. यदि आप OMR पत्रक पर नियत स्थान के अलावा अपना नाम, रोल नम्बर, फोन नम्बर या कोई भी ऐसा चिह्न जिससे आपकी पहचान हो सके, अंकित करते हैं अथवा अभद्र भाषा का प्रयोग करते हैं, या कोई अन्य अनुचित साधन का प्रयोग करते हैं, जैसे कि अंकित किये गये उत्तर को मिटाना या सफेद स्याही से बदलना तो परीक्षा के लिये अयोग्य घोषित किये जा सकते हैं ।
9. आपको परीक्षा समाप्त होने पर प्रश्न-पुस्तिका एवं मूल OMR पत्रक निरीक्षक महोदय को लौटाना आवश्यक है और परीक्षा समाप्त के बाद उसे अपने साथ परीक्षा भवन से बाहर न लेकर जायें । हालांकि आप परीक्षा समाप्त पर OMR पत्रक की डुप्लीकेट प्रति अपने साथ ले जा सकते हैं ।
10. केवल नीले/काले बाल प्वाइंट पेन का ही इस्तेमाल करें ।
11. किसी भी प्रकार का संगणक (कैलकुलेटर) या लाग टेबल आदि का प्रयोग वर्जित है ।
12. गलत उत्तरों के लिए कोई नकारात्मक अंक नहीं है ।

# COMPUTER SCIENCE & APPLICATIONS

## Paper – III

**Note :** This paper contains **seventy five (75)** objective type questions of **two (2)** marks each.

**All** questions are compulsory.

1. If the primal Linear Programming problem has unbounded solution, then it's dual problem will have
  - (A) feasible solution
  - (B) alternative solution
  - (C) no feasible solution at all
  - (D) no bounded solution at all
2. Given the problem to maximize  $f(x)$ ,  $X = (x_1, x_2, \dots, x_n)$  subject to m number of inequality constraints.
$$g_i(x) \leq b_i, i = 1, 2, \dots, m$$
including the non-negativity constraints  $x \geq 0$ . Which of the following conditions is a Kuhn-Tucker necessary condition for a local maxima at  $\bar{x}$ ?
  - (A)  $\frac{\partial L(\bar{X}, \bar{\lambda}, \bar{S})}{\partial x_j} = 0, j = 1, 2, \dots, m$
  - (B)  $\bar{\lambda}_i [g_i(\bar{X}) - b_i] = 0, i = 1, 2, \dots, m$
  - (C)  $g_i(\bar{X}) \leq b_i, i = 1, 2, \dots, m$
  - (D) All of these
3. The following Linear Programming problem has :
$$\text{Max } Z = x_1 + x_2$$
Subject to  $x_1 - x_2 \geq 0$ 
$$3x_1 - x_2 \leq -3$$
and  $x_1, x_2 \geq 0$ 
  - (A) Feasible solution
  - (B) No feasible solution
  - (C) Unbounded solution
  - (D) Single point as solution
4. Given a flow graph with 10 nodes, 13 edges and one connected components, the number of regions and the number of predicate (decision) nodes in the flow graph will be
  - (A) 4, 5
  - (B) 5, 4
  - (C) 3, 1
  - (D) 13, 8
5. Function points can be calculated by
  - (A) UFP \* CAF
  - (B) UFP \* FAC
  - (C) UFP \* Cost
  - (D) UFP \* Productivity
6. Match the following :

<b>List – I</b>	<b>List – II</b>
a. Data coupling	i. Module A and Module B have shared data
b. Stamp coupling	ii. Dependency between modules is based on the fact they communicate by only passing of data
c. Common coupling	iii. When complete data structure is passed from one module to another
d. Content coupling	iv. When the control is passed from one module to the middle of another

**Codes :**

	a	b	c	d
(A)	iii	ii	i	iv
(B)	ii	iii	i	iv
(C)	ii	iii	iv	i
(D)	iii	ii	iv	i
7. A process which defines a series of tasks that have the following four primary objectives is known as
  1. to identify all items that collectively define the software configuration.
  2. to manage changes to one or more of these items.
  3. to facilitate the construction of different versions of an application.
  4. to ensure that software quality is maintained as the configuration evolves over time.
  - (A) Software Quality Management Process
  - (B) Software Configuration Management Process
  - (C) Software Version Management Process
  - (D) Software Change Management Process

8. One weakness of boundary value analysis and equivalence partitioning is
- (A) they are not effective.
  - (B) they do not explore combinations of input circumstances.
  - (C) they explore combinations of input circumstances.
  - (D) none of the above.
9. Which one of the following is not a software myth ?
- (A) Once we write the program and get it to work, our job is done.
  - (B) Project requirements continually change, but change can be easily accommodated because software is flexible.
  - (C) If we get behind schedule, we can add more programmers and catch up.
  - (D) If an organization does not understand how to control software projects internally, it will invariably struggle when it outsources software projects.

10. Match the following with respect to relationship between objects and classes :

**List – I**

**List – II**

- |                     |  |
|---------------------|--|
| a. State diagram    | i. Useful for both abstract modelling and for designing actual program |
| b. Object diagram   | ii. Describes object classes   |
| c. Class diagram    | iii. Useful for documenting test cases                                 |
| d. Instance diagram | iv. Describing the behaviour of a single class of objects.             |

**Codes :**

- |     | a   | b   | c  | d   |
|-----|-----|-----|----|-----|
| (A) | iv  | i   | ii | iii |
| (B) | ii  | iii | iv | i   |
| (C) | iii | iv  | ii | i   |
| (D) | ii  | iv  | i  | iii |

11. Match the following style rules for reusability :

**List – I**

**List – II**

- |                             |   |
|-----------------------------|---|
| a. Keep methods coherent    | i. Write a method to get the last element of a list                     |
| b. Keep methods small       | ii. Maintain parallel structure when possible                           |
| c. Keep methods consistent  | iii. Breaking a method into smaller parts                               |
| d. Provide uniform coverage | iv. Performs a single function or a group of closely related functions. |

**Codes :**

- |     | a   | b   | c  | d   |
|-----|-----|-----|----|-----|
| (A) | iv  | iii | ii | i   |
| (B) | ii  | i   | iv | iii |
| (C) | iii | iv  | ii | i   |
| (D) | ii  | iii | iv | i   |

12. Which is the protocol for performing RPCs between applications in a language and system independent way ?

- (A) Hyper Text Transmission Protocol (HTTP)
- (B) Simple Network Management Protocol (SNMP)
- (C) Simple Object Access Protocol (SOAP)
- (D) Simple Mail Transfer Protocol (SMTP)

13. The document that is used by XSLT to indicate, how to transform the elements of the XML document to another format is

- (A) HTML page
- (B) DOC type procedure
- (C) Style sheet
- (D) Stored procedure

14. Which of the following concepts means adding new concepts to a program as it runs ?

- (A) Data hiding
- (B) Dynamic loading
- (C) Dynamic typing
- (D) Dynamic binding

15. Which of the following correctly describes overloading of functions ?

- (A) Virtual polymorphism
- (B) Transient polymorphism
- (C) Ad-hoc polymorphism
- (D) Pseudo polymorphism

16. Match the following with respect to programming languages :

**List – I**

**List – II**

- |   |             |
|---|-------------|
| a. Structured Language                  | i. JAVA     |
| b. Non-structured Language              | ii. BASIC   |
| c. Object Oriented Programming Language | iii. PASCAL |
| d. Interpreted Programming Language     | iv. FORTRAN |

**Codes :**

- |     |     |     |    |     |
|-----|-----|-----|----|-----|
|     | a   | b   | c  | d   |
| (A) | iii | iv  | i  | ii  |
| (B) | iv  | iii | ii | i   |
| (C) | ii  | iv  | i  | iii |
| (D) | ii  | iii | iv | i   |

17. The compiler converts all operands upto the type of the largest operand is called

- (A) Type Promotion
- (B) Type Evaluation
- (C) Type Conversion
- (D) Type Declaration

18. C++ actually supports the following two complete dynamic systems :

- (A) One defined by C++ and the other not defined by C.
- (B) One defined by C and one specific to C++
- (C) Both are specific to C++
- (D) Both of them are improvements of C

19. Important advantage of using new and delete operators in C++ is

- (A) Allocation of memory
- (B) Frees the memory previously allocated
- (C) Initialization of memory easily
- (D) Allocation of memory and frees the memory previously allocated.

20. Match the following control strategies of prolog :

**List – I**

**List – II**

- |                          |  |
|--------------------------|--|
| a. Forward movement      | i. Variable can be done with a constant, another variable or a function. |
| b. Unification           | ii. The entire conjunctive goal is executed.                             |
| c. Deep back-tracking    | iii. Previous sub goal to find alternative solutions.                    |
| d. Shallow back-tracking | iv. Chooses sub goal with possible unifier.                              |

**Codes :**

- |     |     |     |    |     |
|-----|-----|-----|----|-----|
|     | a   | b   | c  | d   |
| (A) | iv  | i   | ii | iii |
| (B) | ii  | iv  | i  | iii |
| (C) | iii | i   | iv | ii  |
| (D) | ii  | iii | iv | i   |

21. Given the following statements :

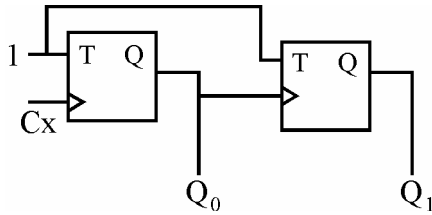
$S_1$  : The grammars  $S \rightarrow asb \mid bsa \mid ss \mid a$  and  $S \rightarrow asb \mid bsa \mid a$  are not equivalent.

$S_2$  : The grammars  $S \rightarrow ss \mid sss \mid asb \mid bsa \mid \lambda$  and  $S \rightarrow ss \mid asb \mid bsa \mid \lambda$  are equivalent.

Which of the following is true ?

- (A)  $S_1$  is correct and  $S_2$  is not correct.
- (B) Both  $S_1$  and  $S_2$  are correct.
- (C)  $S_1$  is not correct and  $S_2$  is correct.
- (D) Both  $S_1$  and  $S_2$  are not correct.

22. What are the final values of  $Q_1$  and  $Q_0$  after 4 clock cycles, if initial values are 00 in the sequential circuit shown below :



- (A) 11                      (B) 10  
(C) 01                      (D) 00
23. High level knowledge which relates to the use of sentences in different contexts and how the context affect the meaning of the sentences ?  
(A) Morphological  
(B) Syntactic  
(C) Semantic  
(D) Pragmatic
24. The objective of \_\_\_\_\_ procedure is to discover at least one \_\_\_\_\_ that causes two literals to match.  
(A) unification, validation  
(B) unification, substitution  
(C) substitution, unification  
(D) minimax, maximum
25. If  $h^*$  represents an estimate of the cost of getting from the current node N to the goal node and  $h$  represents actual cost of getting from the current node to the goal node, then  $A^*$  algorithm gives an optimal solution if  
(A)  $h^*$  is equal to  $h$   
(B)  $h^*$  overestimates  $h$   
(C)  $h^*$  underestimates  $h$   
(D) none of these

26. The mean-end analysis process centers around the detection of differences between the current state and goal state. Once such a difference is isolated, an operator that can reduce the difference must be found. But perhaps that operator can not be applied to the current state. So a sub-problem of getting to a state in which it can be applied is set up. The kind of backward chaining in which operators are selected and then sub goals are set up to establish the precondition of operators is called  
(A) backward planning  
(B) goal stack planning  
(C) operator subgoaling  
(D) operator overloading
27. In alpha-beta pruning, \_\_\_\_\_ is used to cut off the search at maximizing level only and \_\_\_\_\_ is used to cut off the search at minimizing level only.  
(A) alpha, beta  
(B) beta, alpha  
(C) alpha, alpha  
(D) beta, beta
28. If A and B are two fuzzy sets with membership functions  
 $\mu_A(x) = \{0.2, 0.5, 0.6, 0.1, 0.9\}$   
 $\mu_B(x) = \{0.1, 0.5, 0.2, 0.7, 0.8\}$   
Then the value of  $\mu_{A \cap B}$  will be  
(A)  $\{0.2, 0.5, 0.6, 0.7, 0.9\}$   
(B)  $\{0.2, 0.5, 0.2, 0.1, 0.8\}$   
(C)  $\{0.1, 0.5, 0.6, 0.1, 0.8\}$   
(D)  $\{0.1, 0.5, 0.2, 0.1, 0.8\}$
29. The height  $h(A)$  of a fuzzy set A is defined as  
$$h(A) = \sup_{x \in A} A(x)$$
  
Then the fuzzy set A is called normal when  
(A)  $h(A) = 0$               (B)  $h(A) < 0$   
(C)  $h(A) = 1$               (D)  $h(A) < 1$

30. An artificial neuron receives  $n$  inputs  $x_1, x_2, \dots, x_n$  with weights  $w_1, w_2, \dots, w_n$  attached to the input links. The weighted sum \_\_\_\_\_ is computed to be passed on to a non-linear filter  $\phi$  called activation function to release the output.  
 (A)  $\sum w_i$  (B)  $\sum x_i$   
 (C)  $\sum w_i + \sum x_i$  (D)  $\sum w_i \cdot x_i$
31. Consider the formula in image processing  

$$R_D = 1 - \frac{1}{C_R}$$
 Where  $C_R = \frac{n_1}{n_2}$   
 $C_R$  is called as compression ratio  $n_1$  and  $n_2$  denotes the number of information carrying units in two datasets that represent the same information. In this situation  $R_D$  is called as relative \_\_\_\_\_ of the first data set.  
 (A) Data Compression  
 (B) Data Redundancy  
 (C) Data Relation  
 (D) Data Representation
32. Find the false statement :  
 (A) In Modern Cryptography, symmetric key algorithms use same key both for Encryption and Decryption.  
 (B) The symmetric cipher DES (Data Encryption Standard) was widely used in the industry for security product.  
 (C) The AES (Advanced Encryption Standard) cryptosystem allows variable key lengths of size 56 bits and 124 bits.  
 (D) Public key algorithms use two different keys for Encryption and Decryption.
33. The message 11001001 is to be transmitted using the CRC polynomial  $x^3 + 1$  to protect it from errors. The message that should be transmitted is  
 (A) 110010011001  
 (B) 11001001  
 (C) 110010011001001  
 (D) 11001001011
34. \_\_\_\_\_ comparisons are necessary in the worst case to find both the maximum and minimum of  $n$  numbers.  
 (A)  $2n - 2$   
 (B)  $n + \text{floor}(\lg n) - 2$   
 (C)  $\text{floor}\left(\frac{3n}{2}\right) - 2$   
 (D)  $2 \lg n - 2$
35. Let  $A$  and  $B$  be two  $n \times n$  matrices. The efficient algorithm to multiply the two matrices has the time complexity  
 (A)  $O(n^3)$  (B)  $O(n^{2.81})$   
 (C)  $O(n^{2.67})$  (D)  $O(n^2)$
36. The recurrence relation  $T(n) = mT\left(\frac{n}{2}\right) \tan^2$  is satisfied by  
 (A)  $O(n^2)$  (B)  $O(n^{\lg m})$   
 (C)  $O(n^2 \lg n)$  (D)  $O(n \lg n)$
37. The longest common subsequence of the sequences  $X = \langle A, B, C, B, D, A, B \rangle$  and  $Y = \langle B, D, C, A, B, A \rangle$  has length  
 (A) 2 (B) 3  
 (C) 4 (D) 5
38. Assuming there are  $n$  keys and each key is in the range  $[0, m - 1]$ . The run time of bucket sort is  
 (A)  $O(n)$  (B)  $O(n \lg n)$   
 (C)  $O(n \lg m)$  (D)  $O(n + m)$

39. A \_\_\_\_\_ complete subgraph and a \_\_\_\_\_ subset of vertices of a graph  $G = (V, E)$  are a clique and a vertex cover respectively.  
 (A) minimal, maximal  
 (B) minimal, minimal  
 (C) maximal, maximal  
 (D) maximal, minimal
40. Pumping lemma for context-free languages states :  
 Let  $L$  be an infinite context free language. Then there exists some positive integer  $m$  such that any  $w \in L$  with  $|w| \geq m$  can be decomposed as  $w = uv^i xy^j Z$  with  $|vxy|$  \_\_\_\_\_ and  $|vy|$  \_\_\_\_\_ such that  $uv^i xy^j Z \in L$  for all  $i = 0, 1, 2, \dots$   
 (A)  $\leq m, \leq 1$  (B)  $\leq m, \geq 1$   
 (C)  $\geq m, \leq 1$  (D)  $\geq m, \geq 1$
41. The Greibach normal form grammar for the language  $L = \{a^n b^{n+1} \mid n \geq 0\}$  is  
 (A)  $S \rightarrow aSB, B \rightarrow bB \mid \lambda$   
 (B)  $S \rightarrow aSB, B \rightarrow bB \mid b$   
 (C)  $S \rightarrow aSB \mid b, B \rightarrow b$   
 (D)  $S \rightarrow aSb \mid b$
42. Given the following statements :  
 $S_1$  : Every context-sensitive language  $L$  is recursive.  
 $S_2$  : There exists a recursive language that is not context sensitive.  
 Which statement is correct ?  
 (A)  $S_1$  is not correct and  $S_2$  is not correct.  
 (B)  $S_1$  is not correct and  $S_2$  is correct.  
 (C)  $S_1$  is correct and  $S_2$  is not correct.  
 (D)  $S_1$  is correct and  $S_2$  is correct.
43. What is the bit rate for transmitting uncompressed  $800 \times 600$  pixel colour frames with 8 bits/pixel at 40 frames/second ?  
 (A) 2.4 Mbps  
 (B) 15.36 Mbps  
 (C) 153.6 Mbps  
 (D) 1536 Mbps
44. In IPV 4, the IP address 200.200.200.200 belongs to  
 (A) Class A (B) Class B  
 (C) Class C (D) Class D
45. Which layer of OSI reference model is responsible for decomposition of messages and generation of sequence numbers to ensure correct re-composition from end to end of the network ?  
 (A) Physical (B) Data-link  
 (C) Transport (D) Application
46. A client-server system uses a satellite network, with the satellite at a height of 40,000 kms. What is the best-case delay in response to a request ? (Note that the speed of light in air is 3,00,000 km/second).  
 (A) 133.33 m sec  
 (B) 266.67 m sec  
 (C) 400.00 m sec  
 (D) 533.33 m sec
47. The start and stop bits are used in serial communication for  
 (A) error detection  
 (B) error correction  
 (C) synchronization  
 (D) slowing down the communication
48. \_\_\_\_\_ is a type of transmission impairment in which the signal loses strength due to the resistance of the transmission medium.  
 (A) Attenuation (B) Distortion  
 (C) Noise (D) Decibel

49. Match the following :

**List – I**

**List – II**

- |                            |   |
|----------------------------|---|
| a. Indexed Addressing      | i. is not used when an operand is moved from memory into a register or from a register to memory. |
| b. Direct Addressing       | ii. Memory address is computed by adding up two registers plus an (optional) offset.              |
| c. Register Addressing     | iii. Addressing memory by giving a register plus a content offset.                                |
| d. Base-Indexed Addressing | iv. can only be used to access global variables whose address is known at compile time.           |

**Codes :**

- |     |     |    |    |     |
|-----|-----|----|----|-----|
|     | a   | b  | c  | d   |
| (A) | ii  | i  | iv | iii |
| (B) | ii  | iv | i  | iii |
| (C) | iii | iv | i  | ii  |
| (D) | iii | i  | iv | ii  |

50. Which of the following is a design criteria for instruction formats ?

- (A) The size of instructions
- (B) The number of bits in the address fields
- (C) The sufficient space in the instruction format to express all the operations desired.
- (D) All of these

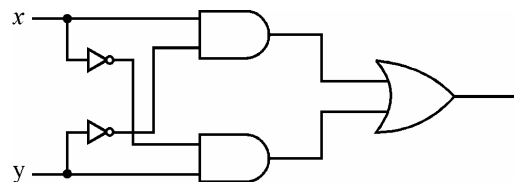
51. Synchronization is achieved by a timing device called a \_\_\_\_\_ which generates a periodic train of \_\_\_\_\_.

- (A) clock generator, clock pulse
- (B) master generator, clock pulse
- (C) generator, clock
- (D) master clock generator, clock pulse

52. Serial access memories are useful in applications where

- (A) Data consists of numbers
- (B) Short access time is required
- (C) Each stored word is processed differently.
- (D) None of these

53. What will be the output of the following logic diagram ?

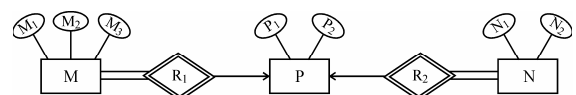


- (A)  $x$  OR  $y$
- (B)  $x$  AND  $y$
- (C)  $x$  XOR  $y$
- (D)  $x$  XNOR  $y$

54. The essential difference between traps and interrupts is

- (A) traps are asynchronous and interrupts are synchronous with the program.
- (B) traps are synchronous and interrupts are asynchronous with the program.
- (C) traps are synchronous and interrupts are asynchronous with the I/O devices.
- (D) None of these.

55. Consider the following ER diagram :



The minimum number of tables required to represent M, N, P, R<sub>1</sub>, R<sub>2</sub> is

- (A) 2
- (B) 3
- (C) 4
- (D) 5



56. Consider the following schemas :
- Branch = (Branch-name, Assets, Branch-city)
- Customer = (Customer-name, Bank name, Customer-city)
- Borrow = (Branch-name, loan number, customer account-number)
- Deposit = (Branch-name, Account-number, Customer-name, Balance)
- Using relational Algebra, the Query that finds customers who have balance more than 10,000 is \_\_\_\_\_
- (A)  $\pi_{\text{customer-name}}(\sigma_{\text{balance} > 10000}(\text{Deposit}))$
- (B)  $\sigma_{\text{customer-name}}(\sigma_{\text{balance} > 10000}(\text{Deposit}))$
- (C)  $\pi_{\text{customer-name}}(\sigma_{\text{balance} > 10000}(\text{Borrow}))$
- (D)  $\sigma_{\text{customer-name}}(\pi_{\text{balance} > 10000}(\text{Borrow}))$

57. Find the false statement :
- (A) The relationship construct known as the weak relationship type was defined by Dey, Storey & Barron (1999)
- (B) A weak relationship occurs when two relationship types are linked by either Event-Precedent sequence or Condition-Precedent sequence.
- (C) Conceptual model is not accurate representation of "Universe of interest".
- (D) Ternary, Quaternary and Quintary relationships are shown through a series of application scenario's and vignette's.

58. Consider the table Student (stuid, name, course, marks). Which one of the following two queries is correct to find the highest marks student in course 5 ?
- Q.1. Select S.stuid  
From student S  
Where not exists  
(select \* from student e where e course = '5' and e marks  $\geq$  s marks)
- Q.2. Select s.stu.id  
From student S  
Where s . marks > any  
(select distinct marks from student S where s . course = 5)
- (A) Q. 1  
(B) Q. 2  
(C) Both Q. 1 and Q. 2  
(D) Neither Q. 1 nor Q. 2

59. Armstrong (1974) proposed systematic approach to derive functional dependencies. Match the following w.r.t. functional dependencies :
- | List – I                    | List – II   |
|-----------------------------|---|
| a. Decom-position rule      | i. If $X \rightarrow Y$ and $Z \rightarrow W$ then $\{X, Z\} \rightarrow \{Y, W\}$  |
| b. Union rule               | ii. If $X \rightarrow Y$ and $\{Y, W\} \rightarrow Z$ then $\{X, W\} \rightarrow Z$ |
| c. Com-position rule        | iii. If $X \rightarrow Y$ and $X \rightarrow Z$ then $X \rightarrow \{Y, Z\}$       |
| d. Pseudo transitivity rule | iv. If $X \rightarrow \{Y, Z\}$ then $X \rightarrow Y$ and $X \rightarrow Z$        |

**Codes :**

- |     | a   | b   | c   | d  |
|-----|-----|-----|-----|----|
| (A) | iii | ii  | iv  | i  |
| (B) | i   | iii | iv  | ii |
| (C) | ii  | i   | iii | iv |
| (D) | iv  | iii | i   | ii |

60. Match the following :
- |                                  |                                     |                  |  |
|----------------------------------|-------------------------------------|------------------|--|
| <b>List – I</b>                  |                                     | <b>List – II</b> |  |
| a. Secondary Index               | i. Functional Dependency            |                  |  |
| b. Non-procedural Query Language | ii. B-Tree                          |                  |  |
| c. Closure of set of Attributes  | iii. Relational Algebraic Operation |                  |  |
| d. Natural JOIN                  | iv. Domain Calculus                 |                  |  |

**Codes :**

- |     |    |     |    |     |
|-----|----|-----|----|-----|
|     | a  | b   | c  | d   |
| (A) | i  | ii  | iv | iii |
| (B) | ii | i   | iv | iii |
| (C) | i  | iii | iv | ii  |
| (D) | ii | iv  | i  | iii |

61. Which of the following is not true with respect to a trackball and/or spaceball ?
- A trackball is a two dimensional positioning device while as a spaceball provides six degrees of freedom.
  - Unlike the trackball a spaceball does not actually move.
  - A trackball is a three dimensional positioning device while as a spaceball provides six degrees of freedom.
- (A) I & II                      (B) II & III  
(C) II only                      (D) III only
62. Which of the following statement(s) is (are) true ?
- Two successive translations are additive.
  - Two successive rotations are additive.
  - Two successive scaling operations are multiplicative.
- (A) I and II  
(B) I and III  
(C) II and III  
(D) All the above

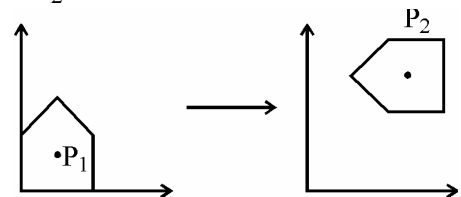
63. Given below are three basic rules :
- Squash and Stretch
  - Slow-in and Slow-out
  - To stage the action properly
- These rules are applied in case of
- (A) Rendering  
(B) Morphing  
(C) Animation  
(D) All the above

64. Which of the following points lies on the same side as the origin, with reference to the line  $3x + 7y = 2$  ?
- (A) (3, 0)                      (B) (1, 0)  
(C) (0.5, 0.5)              (D) (0.5, 0)

65. The transformation matrix required for conversion of CMY colour model to RGB colour model is given as :

- (A) 
$$\begin{bmatrix} R \\ G \\ B \end{bmatrix} = \begin{bmatrix} C \\ M \\ Y \end{bmatrix} - \begin{bmatrix} 1 \\ 1 \\ 1 \end{bmatrix}$$
- (B) 
$$\begin{bmatrix} R \\ G \\ B \end{bmatrix} = \begin{bmatrix} C \\ M \\ Y \end{bmatrix} - \begin{bmatrix} 1 \\ 2 \\ 3 \end{bmatrix}$$
- (C) 
$$\begin{bmatrix} R \\ G \\ B \end{bmatrix} = \begin{bmatrix} 1 \\ 1 \\ 1 \end{bmatrix} - \begin{bmatrix} C \\ M \\ Y \end{bmatrix}$$
- (D) 
$$\begin{bmatrix} R \\ G \\ B \end{bmatrix} = \begin{bmatrix} C \\ M \\ Y \end{bmatrix} - \begin{bmatrix} 0.5 \\ 0.5 \\ 0.5 \end{bmatrix}$$

66. What steps shall be required to rotate an object about the point  $P_1$  (as shown in fig. 1) and its placement such that what was at  $P_1$  is now reduced and is at  $P_2$  (as shown in fig. 2) ?



- I. Translate  $P_1$  to origin  
II. Scale as required  
III. Rotate  
IV. Translate to the final position  $P_2$ .
- (A) I, II and III  
(B) II, III and IV  
(C) I, III & IV  
(D) All of the above

67. In Unix, how do you check that two given strings a and b are equal ?  
 (A) test \$a -eq \$b  
 (B) test \$a -equal \$b  
 (C) test \$a = \$b  
 (D) Sh -C test \$a == \$b
68. In windows 2000 operating system all the processor-dependent code is isolated in a dynamic link library called  
 (A) NTFS file system  
 (B) Hardware abstraction layer  
 (C) Microkernel  
 (D) Process Manager
69. To place a sound into a word document, following feature of windows is used :  
 (A) Clip board  
 (B) Task switching  
 (C) C Win App  
 (D) OLE
70. Translation Look-aside Buffer (TLB) is  
 (A) a cache-memory in which item to be searched is compared one-by-one with the keys.  
 (B) a cache-memory in which item to be searched is compared with all the keys simultaneously.  
 (C) an associative memory in which item to be searched is compared one-by-one with the keys.  
 (D) an associative memory in which item to be searched is compared with all the keys simultaneously.
71. Simplest way of deadlock recovery is  
 (A) Roll back  
 (B) Preempt resource  
 (C) Lock one of the processes  
 (D) Kill one of the processes
72. The directory structure used in Unix file system is called  
 (A) Hierarchical directory  
 (B) Tree structured directory  
 (C) Directed acyclic graph  
 (D) Graph structured directory
73. Which statement is not true about process O in the Unix operating system ?  
 (A) Process O is called init process.  
 (B) Process O is not created by fork system call.  
 (C) After forking process 1, process O becomes swapper process.  
 (D) Process O is a special process created when system boots.
74. Which of the following commands would return process\_id of sleep command ?  
 (A) Sleep 1 and echo \$?  
 (B) Sleep 1 and echo \$#  
 (C) Sleep 1 and echo \$x  
 (D) Sleep 1 and echo \$!
75. Possible thread states in Windows 2000 operating system include :  
 (A) Ready, running and waiting  
 (B) Ready, standby, running, waiting, transition and terminated  
 (C) Ready, running, waiting, transition and terminated  
 (D) Standby, running, transition and terminated

**Space For Rough Work**